

## ❖ Introduction

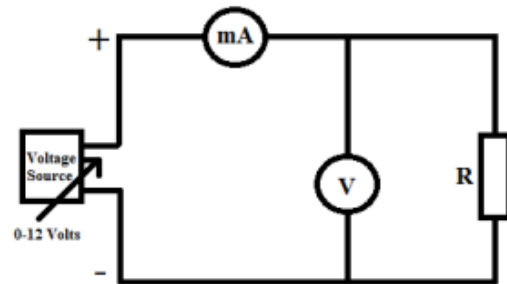
**The objectives of this experiment are:**

- ✓ To investigate the various applications of ohm's law.
- ✓ To investigate series and parallel resistive circuits.
- ✓ To investigate the voltage divider principle by using Variable resistance.



## ❖ Procedure

### Part one(Ohm's Law)

1. we Set up the circuit as shown down.

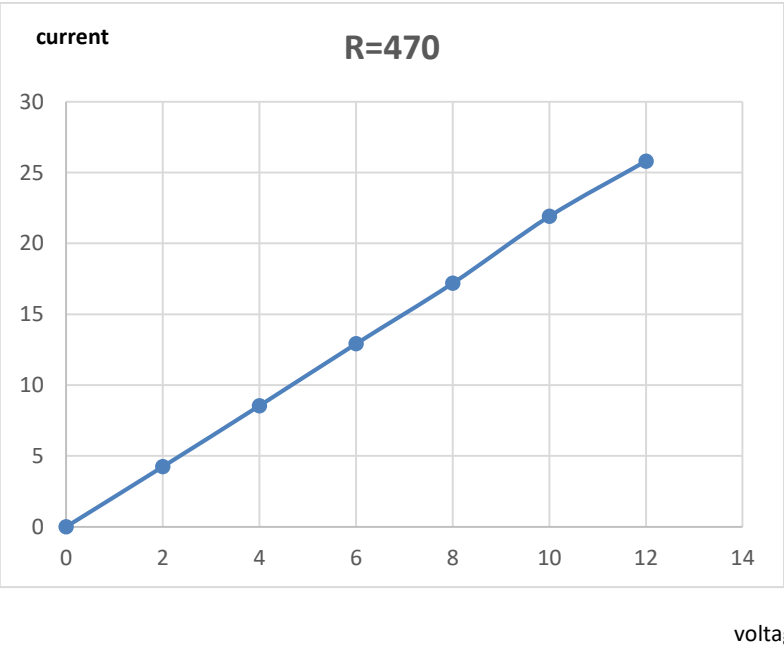
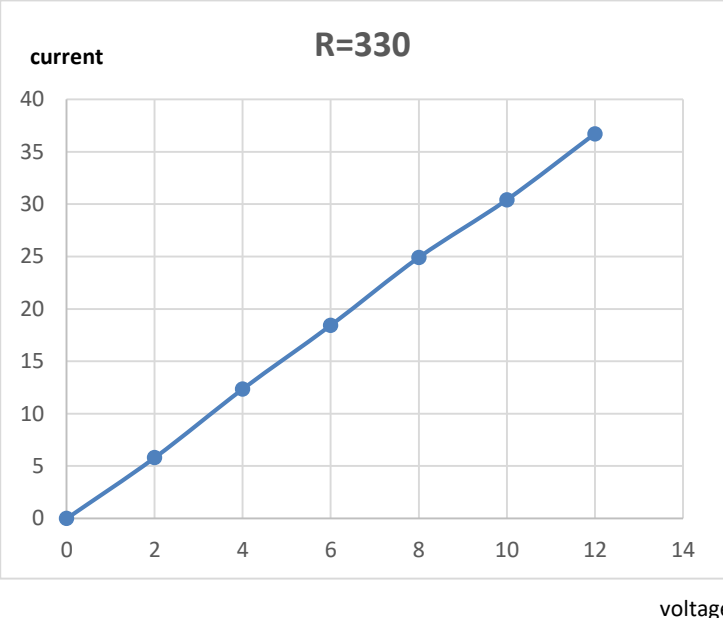
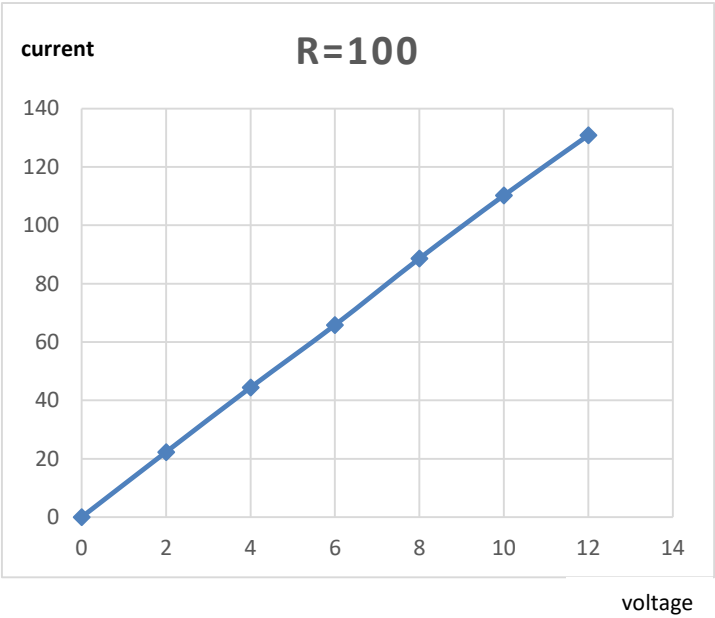


2. We measure the currents at certain resistance for certain voltage values(see Table 1).



V		0	2	4	6	8	10	12
R=100Ω	I(mA)	0	22.3	44.4	65.8	88.6	110.2	130.8
	P(mW)	0	44.6	177.6	394.8	708.8	1102	1569.6
	R(Ω)	100	89.68	90.09	91.18	90.29	90.74	91.74
R=330Ω	I(mA)	0	5.8	12.35	18.43	24.9	30.4	36.7
	P(mW)	0	11.6	49.4	110.58	199.2	304	440.4
	R(Ω)	330	344.8	323.88	325.5	321.28	328.9	326.9
R=470Ω	I(mA)	0	4.24	8.54	12.91	17.18	21.9	25.8
	P(mW)	0	8.48	34.16	77.46	137.44	219	309.6
	R(Ω)	470	471.6	468.3	464.7	465.6	456.6	465.1

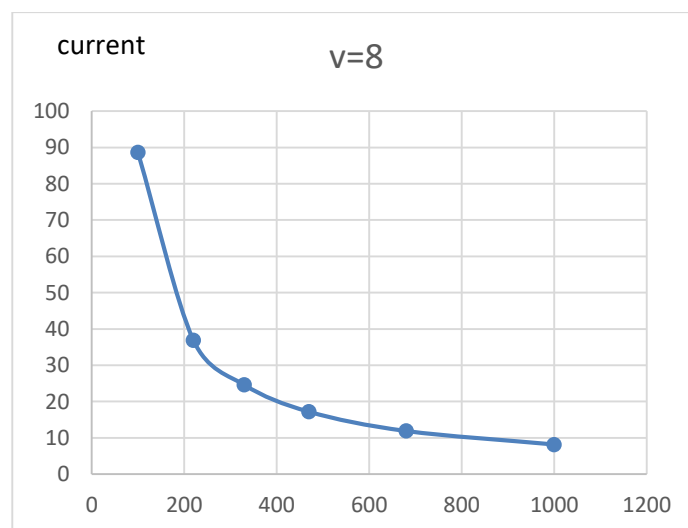
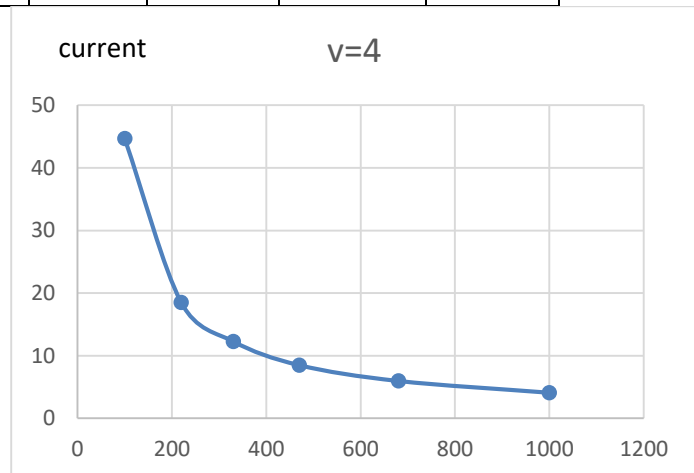
Table 1



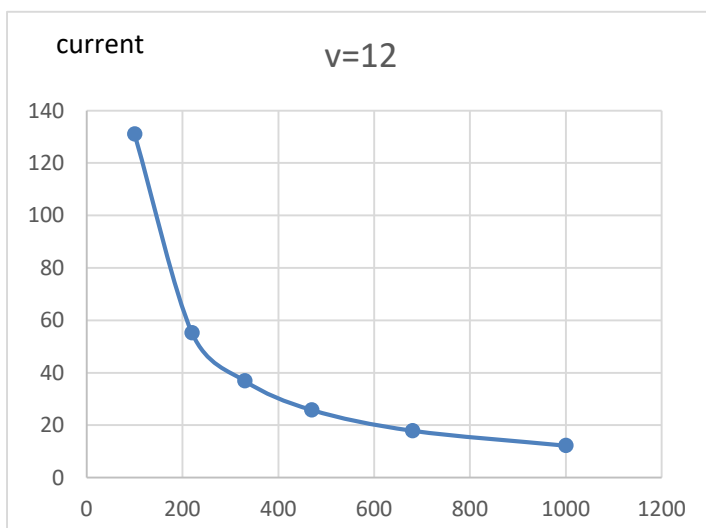
3. we Find the currents for the rest of resistor at voltages 4, 8 and 12 voltages (see Table 2).

Table 2

R $\Omega$	100	220	330	470	680	1000
I(mA)at 4 v	44.7	18.5	12.3	8.5	5.98	4.1
I(mA)at 8 v	88.6	36.9	24.6	17.2	11.9	8.18
I(mA)at 12 v	131	55.2	36.9	25.8	17.9	12.2



resistance



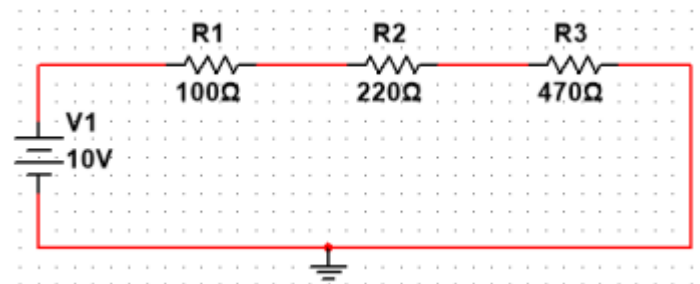

resistance

resistance


## Part Two(series and parallel connection)

### ❖ Series connection

1. we Set up the circuit of series connection as follows.




2. we Connect the ammeter in series with the circuit and measure the current.(see table 3)



$R\Omega$	100	220	470
$I(\text{mA})$	12.8	12.8	12.78

Table 3

3. we Connect the voltmeter oneach resistor and measure their voltages and we calculatethe value of resistanceof each resistor from the values of current and voltage.(see table 4)



<b>R <math>\Omega</math></b>	<b>100</b>	<b>220</b>	<b>470</b>
<b>V(volt)</b>	<b>1.162</b>	<b>2.82</b>	<b>6.02</b>
<b>R(calculated)<math>\Omega</math></b>	<b>90.7</b>	<b>220.3</b>	<b>470.1</b>

**Table 4**

The total resistance=the sum of  
voltages/current= $(1.162+2.82+6.02)/12.8=781.4\Omega$

- ✓ R total= $90.7+220.3+470.1=781.1\Omega$
- ✓ Req= $R_1+R_2+R_3+\dots$

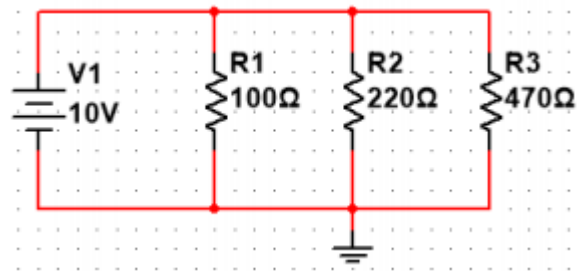


## ❖ parallel connection


1. we Set up the circuit of parallel connection .

2. we Connect the ammeter in series with the source to find  $I_{total}$  , then connect it in series with each resistor to find their currents.


3. Measure the value of resistors from the values of voltages and currents and find a relationship between parallel circuit components.



Measuring Total voltage



Measuring resistance current



<b>RΩ</b>	100	220	470
<b>V volt</b>	9.98	9.72	9.96
<b>I mA</b>	108.3	44.7	21.2
<b>Calculated R</b>	92.1	217.4	469.8


$$I_{\text{total}} = 171.1 \text{ mA}$$

- ✓ The total resistance = the voltage / the sum of the currents =  $10 / (108 + 44.7 + 21.2) = 57.4 \text{ ohm}$ .
- ✓  $1/R_{\text{eq}} = 1/R_1 + 1/R_2 + 1/R_3 + \dots$
- ✓  $R_{\text{eq}} = 1 / (1/92.1 + 1/217.4 + 1/469.8) = 41.65 \text{ ohm}$ .

### ❖ Series and Parallel

1. We set up the circuit as shown.

2. We measure the partial currents at the measuring points. (see table 5)



Partial current and total current(mA)		
Measuring points		
A-B	C-D	E-F
29.9	9.7	20

Table 5

**3. We measure the partial voltages at the resistors R1,R2,R3 and R4.(see table6)**

Partial voltages(v)			
UR1	UR2	UR3	UR4
.654	2.714	6.62	6.63

Table 6

**☒ Mathematically**

$$R_{eq}=344.1\Omega$$

$$I_{total}=29mA$$

$$VR1=29*22=638mV$$

$$vR2=29*100=2900mV$$

$$v(\text{for parallel})=6.44 \text{ volt}=VR3=VR4$$

**☒ By Measuring**

$$V_{total}=9.988 \text{ volt}$$

$$I_{total}=29.9$$

$$\checkmark R_{eq}=9.988/29.9mA=334.046 \Omega (\text{while mathematically its } =344.1 \Omega)$$



## Part 3(voltage divider)

1. we Connect the circuit as shown down.
2. we Measure the voltage  $V_2$  at each of the potentiometer positions ( $\alpha=0$  to 10) without  $R_3$  and then with  $R_3$ .(see table6)

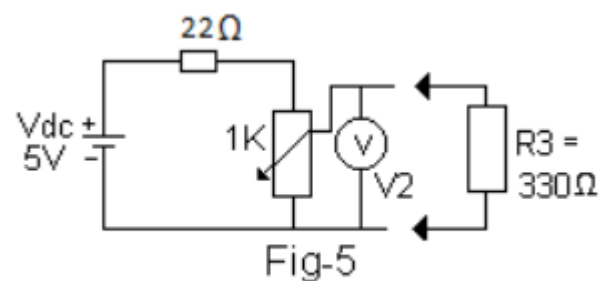

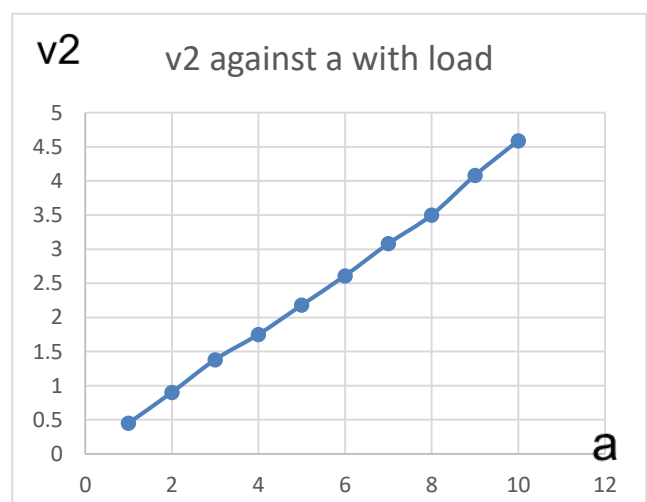
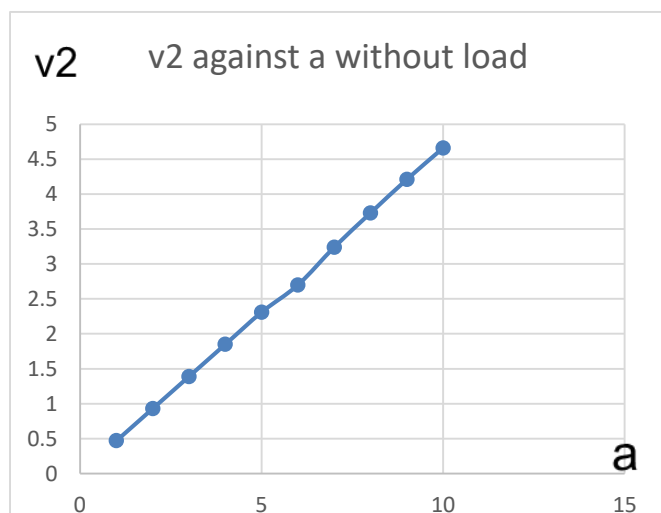


Table 6

<b>A</b>	<b>1</b>	<b>2</b>	<b>3</b>	<b>4</b>	<b>5</b>	<b>6</b>	<b>7</b>	<b>8</b>	<b>9</b>	<b>10</b>
<b>V2 (R3 not conn.)</b>	<b>0.47</b>	<b>0.93</b>	<b>1.39</b>	<b>1.85</b>	<b>2.31</b>	<b>2.7</b>	<b>3.24</b>	<b>3.73</b>	<b>4.21</b>	<b>4.66</b>
<b>V2 (R3 conn.)</b>	<b>0.45</b>	<b>0.9</b>	<b>1.38</b>	<b>1.75</b>	<b>2.18</b>	<b>2.61</b>	<b>3.08</b>	<b>3.5</b>	<b>4.08</b>	<b>4.59</b>



- ✓ Describe the shape of curves.

The curve that represents  $V_2$  without load resistor is rising smoothly applying the voltage division between the potentiometer resistors while the curve representing  $V_2$  against  $\alpha$  with a load resistor  $R_3$  the voltages changed and are rising very slowly due to current branching between the potentiometer resistor and  $R_3$ .

- ✓ Without load, find  $R_2$  when  $\alpha=3$  (from the graph and calculation).

☒ From the graph and measured : when  $\alpha=3$ ,  $V_2=1.5$  volts.

$$I_{\text{total}} = 5 \sqrt{10022} = .0004989 \text{ A}$$

$$R_2 = 1.5 \sqrt{.004989} = 3006.6 \Omega$$

☒ By calculation

$$I_{\text{total}} = 5 \sqrt{3002} = .001654 \text{ A}$$

$$V_{R_2} = (3000 \sqrt{3022}) * 5 = 4.96 \text{ volt}$$

$$R_2 = V/I = 4.96 \sqrt{.001654} = 3000 \Omega$$

- ✓ The value of  $V_2$  when the potentiometer is at position 5 with  $R_3=4.7 \text{ K } \Omega$

$$R_{\text{total}} = (4.7 * 5 \sqrt{4.7+5})^{22} = 24.42 \Omega$$

$$I_{\text{total}} = .2 \text{ A}$$

$$V_2 = 1.985 \text{ volt}$$

## ❖ Conclusion

By the end of this experiment, we were able to identify the ohm's law. We also applied the principle of series and parallel connections of circuits. Moreover, we worked with a variable resistance potentiometer to apply voltage divider.